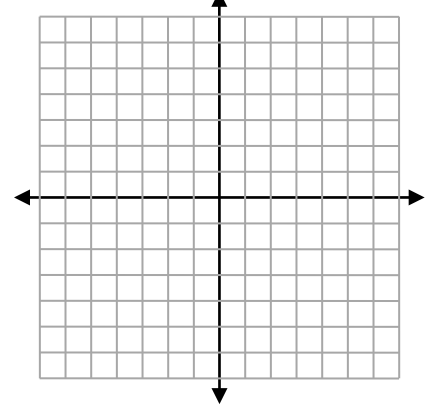
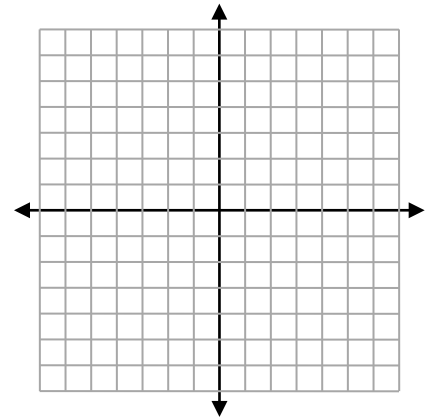
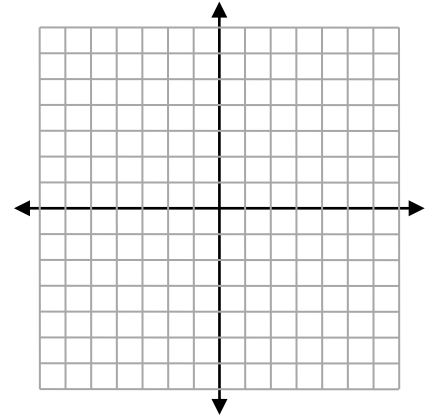
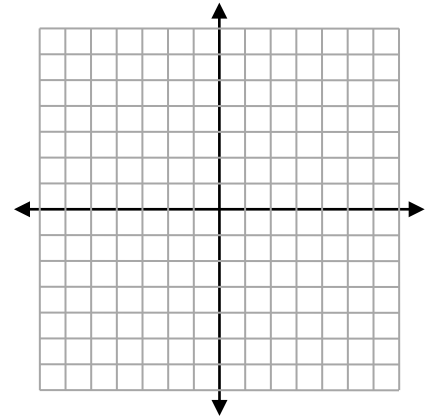


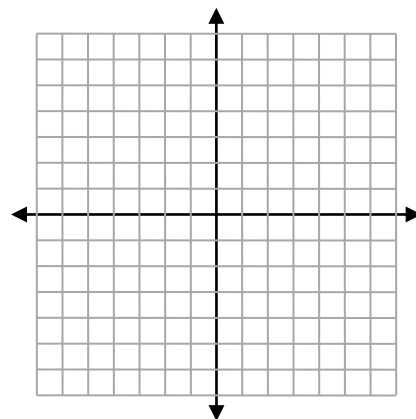
FINDING SLOPE #1 (Graphing method)

Graph the points and find slope using $m = \frac{\text{rise}}{\text{run}}$

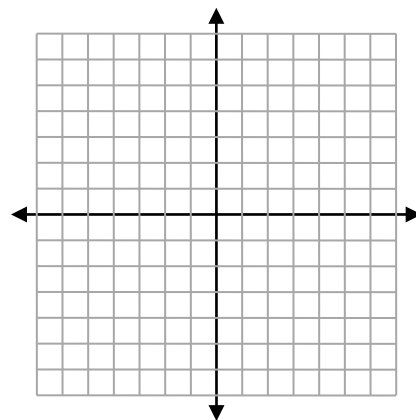
1. Plot the points (0, 2) and (4, 3) and find slope.
2. Plot the points (0, -3) and (2, 1) and find the slope.
3. Plot the points (0, -1) and (1, 4) and find the slope.
4. Plot the points (0, 3) and (4, 1) and find the slope.
5. Plot the points (0, 1) and (1, -3) and find the slope.
6. Plot the points (0, -3) and (3, -1) and find the slope.
7. Plot the point (0, -2) and (1, 2) and find the slope.
8. Plot the point (0, 4) and (2, -6) and find the slope.



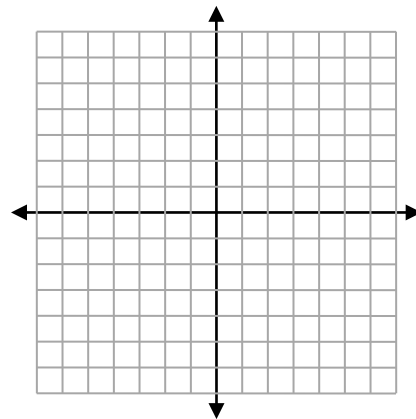
9. Plot the points $(0, -2)$ and $(1, 4)$. and find slope.



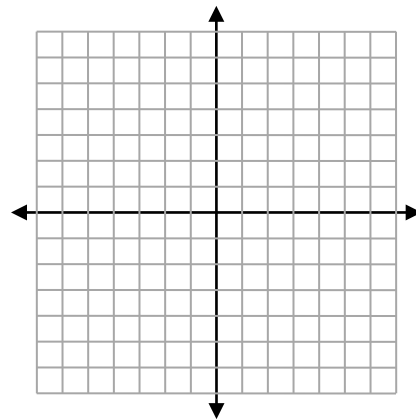
10. Plot the points $(-4, 6)$ and $(5, 3)$ and find the slope.



11. Plot the points $(2, -1)$ and $(7, -1)$ and find the slope.



12. Plot the points $(-5, 3)$ and $(-4, 9)$ and find the slope.



13. Plot the points $(6, 4)$ and $(3, 2)$ and find the slope.

14. Plot the points $(0, 4)$ and $(3, -4)$ and find the slope.

15. Plot the points $(-2, 3)$ and $(2, 2)$ and find the slope.

16. Plot the points $(0, 2)$ and $(-1, -1)$ and find the slope.

Name: _____ Period: _____

FINDING SLOPE #2 (Using slope formula)

Find the slope using the formula $m = \frac{y_2 - y_1}{x_2 - x_1}$

1. Find the slope using points: (2, 2) and (-5, 4)
2. Find the slope using points: (3, 9) and (-5, 3)
3. Find the slope using points: (5, 5) and (4, 2)
4. Find the slope using points: (5, 7) and (2, 7)
5. Find the slope using points: (-4, 0) and (12, 2)
6. Find the slope using points: (2, 5) and (-6, -3)
7. Find the slope using points: (-8, -2) and (1, 4)
8. Find the slope using points: (0, -3) and (-4, 2)
9. Find the slope using points: (5, 1) and (9, 4)
10. Find the slope using points: (-10, 6) and (-5, 8)
12. Find the slope using points: (7, -3) and (11, -4)
12. Find the slope using points: (13, 0) and (-2, -12)

13. Find the slope using points: $(-15, 7)$ and $(-10, 6)$

14. Find the slope using points: $(-13, 8)$ and $(21, 8)$

15. Find the slope using points: $(-3, -2)$ and $(1, 4)$

16. Find the slope using points: $(2, 5)$ and $(8, 9)$

17. Find the slope using points: $(3, 3)$ and $(2, 0)$

18. Find the slope using points: $(-2, 3)$ and $(3, 0)$

19. Find the slope using points: $(1, 2)$ and $(2, 6)$

20. Find the slope using points: $(-3, -4)$ and $(0, -2)$

21. Find the slope using points: $(-2, 5)$ and $(4, -2)$

22. Find the slope using points: $(2, 5)$ and $(11, 11)$

23. Find the slope using points: $(-1, -2)$ and $(3, 2)$

24. Find the slope using points: $(3, -1)$ and $(13, 1)$

25. Find the slope using points: $(-2, -5)$ and $(2, 3)$

26. Find the slope using points: $(-7, 4)$ and $(5, 2)$