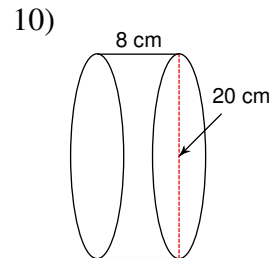
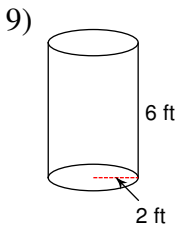
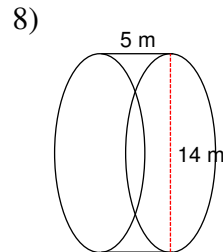
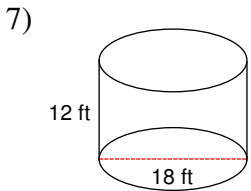
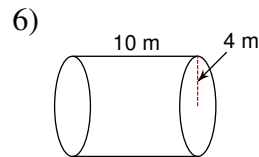
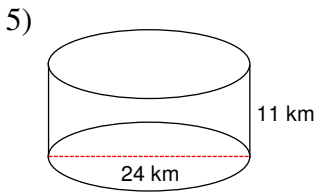
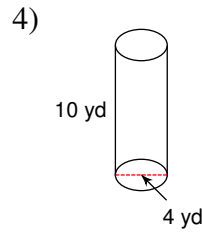
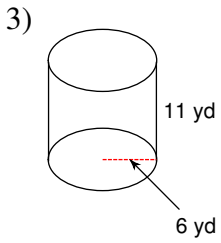
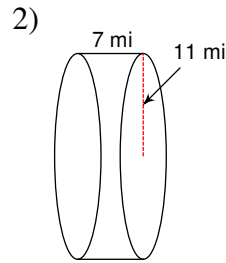
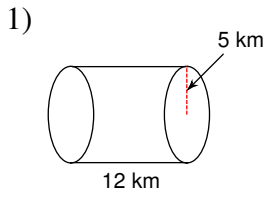
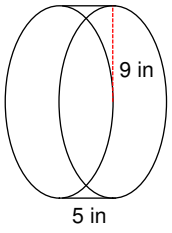


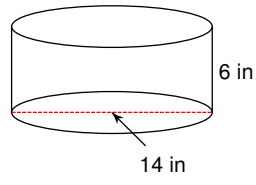
Find the volume of each figure. Round your answers to the nearest thousandth, if necessary.



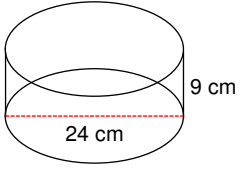
11)



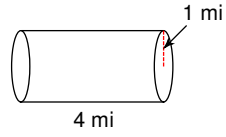
12)



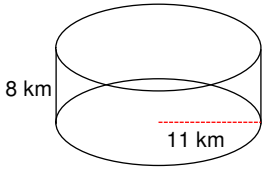
13)



14)



15)



Answers to

1) 942.48 km^3

5) 4976.28 km^3

9) 75.4 ft^3

13) 4071.5 cm^3

2) 2660.93 mi^3

6) 502.65 m^3

10) 2513.27 cm^3

14) 12.57 mi^3

3) 1244.07 yd^3

7) 3053.63 ft^3

11) 1272.35 in^3

15) 3041.06 km^3

4) 125.66 yd^3

8) 769.69 m^3

12) 923.63 in^3